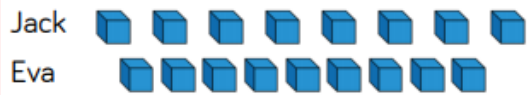


Year 1 Maths Problem Solving and Reasoning

Tuesday 09.02.21

Jack and Eva are playing a game.  
They each collect a handful of cubes.  
They arrange their cubes to see who has more.

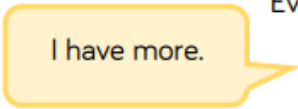


Jack says:



I have more.

Eva says:

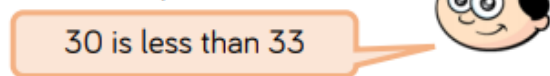


I have more.

Who is right?

Practise comparing objects with your friend.

Dexter compares two numbers.



Do you agree with Dexter?

Explain your answer.