

Q1.

Amina posts three large letters.
The postage costs the same for each letter.
She pays with a £ 20 note.
Her change is £14.96
What is the cost of posting **one** letter?

Show
your
method

£

2 marks

Q2.

This table shows the temperature at 9 am on three days in January.

1st January	8th January	15th January
+5°C	−4°C	+1°C

What is the difference between the temperature on 1st January and the temperature on 8th January?

°C

1 mark

On 22nd January the temperature was 7 degrees lower than on 15th January.
What was the temperature on 22nd January?

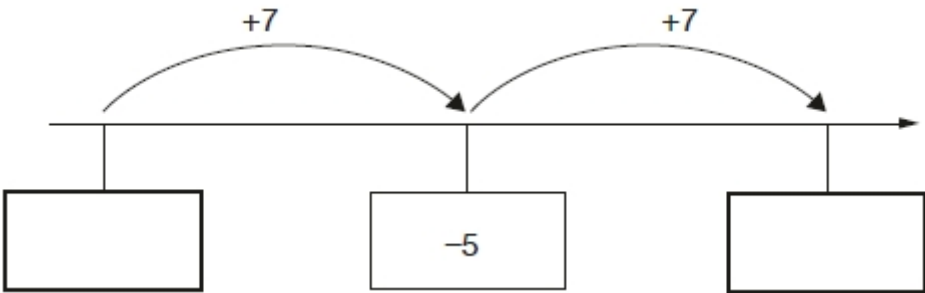
°C

1 mark

Q3.

Here is part of a number line.

Write the missing numbers in the boxes.



2 marks

Q4.

Two decimal numbers add together to equal 1

One of the numbers is 0.007

What is the other number?

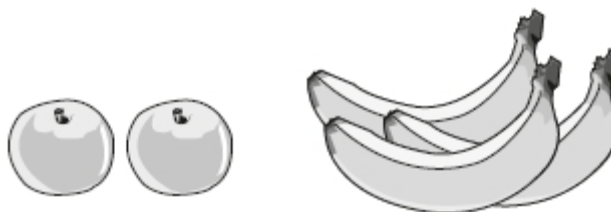
1 mark

Q5.

A shop sells fruit.

Chen buys 2 apples and 3 bananas.

He pays £2.35



Megan buys 2 apples and 1 banana.

She pays £1.25



How much does **one** banana cost?

Show your method

£

2 marks

Mark schemes

Q1.

Award **TWO** marks for the correct answer of £1.68

If the answer is incorrect, award **ONE** mark for evidence of an appropriate method, e.g.

- $20 - 14.96 = 5.04$
 $5.04 \div 3$

*Accept for **ONE** mark an answer of £168 OR £168p as evidence of an appropriate method.*

*Answer need not be obtained for the award of **ONE** mark.*

Up to 2m

[2]

Q2.

(a) 9

***Do not** accept –9 or 9–*

1

(b) –6

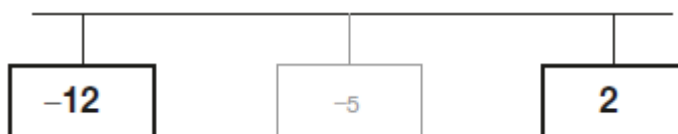
***Do not** accept 6–*

1

[2]

Q3.

Award **TWO** marks for both numbers correct as shown.



If the answer is incorrect, award **ONE** mark for one number correct.

***Do not** accept 12–*

Accept +2 in the right-hand box.

Up to 2

[2]

Q4.

0.993

[1]

Q5.

Award **TWO** marks for the correct answer of 55p **OR** £0.55

If the answer is incorrect, award **ONE** mark for evidence of appropriate working, eg

■ $£2.35 - £1.25 = £1.10$

$£1.10 \div 2 =$ wrong answer

*Accept for **ONE** mark £55 **OR** £55p **OR** 0.55p as evidence of appropriate working.*

*Working must be carried through to reach an answer for the award of **ONE** mark.*

Up to 2
U1

[2]